
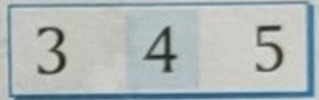


Before-Between-After

Look at number 4 on number line.



1. Number 3 is on the left of number 4.
So, 3 comes just before 4.
2. The number 5 is on the right of number 4.
So, 5 comes just after 4.
3. The number 4 is between 3 and 5.




Activity-5

Summative Assessment Based On CCE

Skills / Aspects - Concept, Written work


1. Which number comes just before 5?




2. Which number comes just after 2?




3. What comes in between 7 and 9?



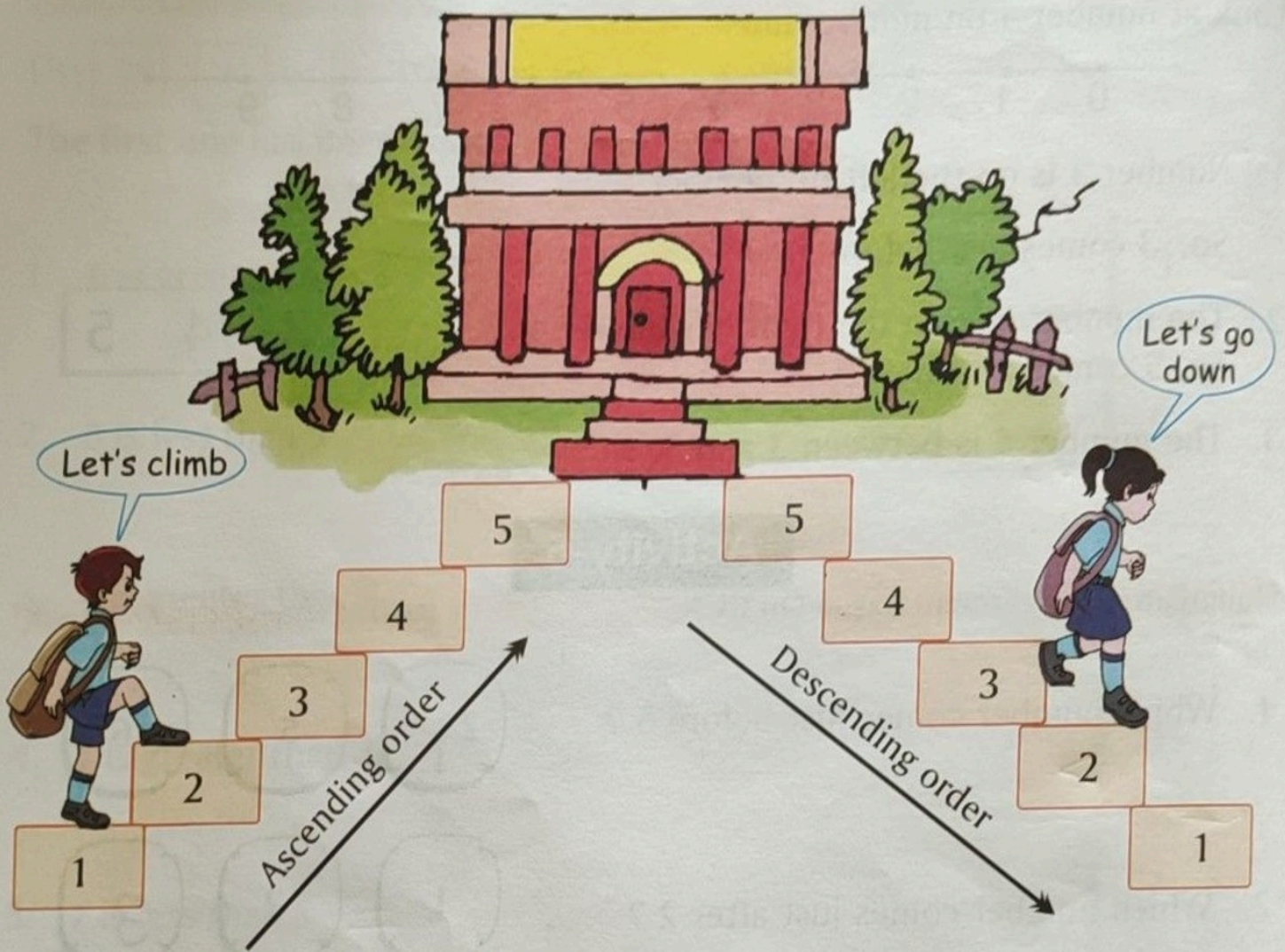
4. Circle all the numbers which come after 3.



5. Circle all the numbers which come before 7.



Ascending and Descending Order




Activity-6


Summative Assessment Based On CCE

Skills / Aspects - Concept, Written work

1. Write the numbers in ascending order.



2. Write the numbers in descending order.



Oral

1. What comes after 3?
2. Which is greater : 5 or 2?
3. Which number comes just after 7?

Review Exercise

Summative Assessment Based On CCE

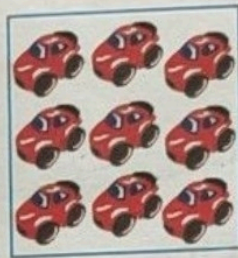
Skills / Aspects - Concept, Written work

1. Count and write the number and number name.



8

Eight



9

Nine

2. Use $>$, $<$ or $=$:

(a)

7

$>$

5

(c)

6

$<$

8

(b)

3

$=$

3

(d)

9

$>$

2

3. Write in ascending order :

9

3

5

4

3

4

5

9

4. Write in descending order :

7

2

8

6

8

7

6

2

5. Circle \bigcirc the largest number and tick \checkmark the smallest number :

3

5

6

\bigcirc 8

\checkmark 2

4