

PARAGON CONVENT SCHOOL

SECTOR – 24 B , CHANDIGARH

CH – 9 (MORE ABOUT SHAPES)


WORKSHEET

CLASS – 2

SUB – MATHS

Q-1. Identify the shapes and complete the sentences-

1.



1. This is a **triangle** .
- 2.. It has **3 sides** and **3 vertices**.

Triangle

2.



1. This is a **rectangle**.
2. It has **4 sides** and **4 vertices**.
3. Its **opposite** sides are equal.

Rectangle


3..



1. This is a **circle**.
2. It has **no** sides and **no** vertices

Circle




4..



1. This is a **square**.
2. It has **4 sides** and **4 vertices**.
3. Its all sides are **equal**.

Square

Q-2. Colour the correct answers :

- | | | | |
|--|--|---|---|
| 1.. A number with straight lines only . | 7 | 8 | 9 |
| 2. A letter with curved lines only . | N | I | O |
| 3.. A number with curved lines only . | 1 | 8 | 4 |
| 4.. Letter with both curved and straight lines . | P | S | N |
| 5.. A figure with straight lines only . |  |  |  |

