







Q-4. Here is the record of boxes sold by a shopkeeper in one week .

Days	Number of Red-Boxes Sold
Monday	
Tuesday	
Wednesday	
Thursday	
Friday	
Saturday	

Read the above table and answer the following questions –

Q-1. On which day the maximum number of boxes sold ?

Ans : Friday

Q-2. How many boxes were sold on Thursday ?

Ans : 5 boxes

Q-3. On which day the minimum number of boxes sold ?

Ans : Saturday


Q-4. Find the total number of boxes sold by the shopkeeper .

Ans : 23 boxes

Q-5. How many boxes were sold on Wednesday ?

Ans : 3 boxes

Q-5. In a garden there are different kinds of flowers –



By using the pictograph , answer the following questions –

Q-1. Which flowers are most popular in the garden ?

Ans : Rose flowers

Q-2. How many Sunflower are there in the garden ?

Ans : 5

Q-3. Which flowers are least popular in the garden ?

Ans : Marigold

Q-4. Find the total number of flowers in the garden .

Ans : 21 flowers

Q-5. Which flowers are more : Lotus or Tulip ?

Ans : Both are equal .