






PARAGON CONVENT SCHOOL
SECTOR – 24B , CHANDIGARH
CH – 13 (DATA HANDLING)
WORKSHEET

CLASS- 2

SUB – MATHS

Q-1. Aditya decided to conduct a study on most popular car colour. So he stood outside his house and recorded the observation about 50 cars passed from there.

This was what he observed.

Car Color	Number of cars
Red Car 	16
Green Car 	12
Blue Car 	5
Black Car 	4
Orange Car 	13

Now, read the above table and answer the following questions:

Q1. How many cars did Aditya count?

Ans. 50

Q2. How many blue cars did Aditya count?

Ans. 5

Q3. How many green cars did Aditya count?

Ans. 12

Q4. What is the most popular colour car according to his observation?






Ans. Red Car

Q5. What is the least popular colour car according to his observation?

Ans. Black Car

Q-2. Riya interviews 20 people and asks them which ice-cream flavour is their favourite. She made a pictograph with the details she gathered:

Here is what she found.

Flavor	No. of people
Vanilla	
Chocolate	
Strawberry	
Pineapple	
Peach	

Answer the following questions by using the pictograph :

Q1. Which ice cream flavour do you think is most popular choice?

Ans. Chocolate

Q2. Which ice cream flavour do you think is least popular choice?

Ans. Peach

Q3. How many people chose vanilla as their favourite ice cream flavour?

Ans. 3






Q4. How many people chose peach as their favourite ice cream flavour?

Ans. 1

Q-5. Which flavour is liked more : Pineapple or Strawberry ?

Ans . Strawberry

Q-3. Kanika has different types of vegetables given below -

Tomato	
Capsicum	
Carrot	
Mushroom	
Potato	

Now, read the above table and answer the following questions:

Q1. How many tomatoes are there?

Ans. 4

Q2. Which kind of vegetable is maximum in number?

Ans. Potato

Q3. Which kind of vegetable is minimum in number?

Ans. Capsicum

Q4. What is the total number of vegetables?

Ans. 25