

PARAGON CONVENT SCHOOL

SECTOR – 24 B , CHANDIGARH






CH – 16 (DATA HANDLING)

WORKSHEET

CLASS – 3

SUB – MATHS

Q-1. In a garden there are different kinds of plants –

Kind of flower plant	Number of plants bought
Sunflower	
Marigold	
Tulip	
Rose	
Each  = 4 Plants	

By using the given pictograph , answer the following questions –

Q-1. How many Marigold plants are there in the garden ?

Ans : 20 Plants

Q-2. Which plants are most popular in the garden ?

Ans : Rose plants






Q-3. Which plants are least popular in the garden ?

Ans : Sunflower

Q-4. Find the total no of plants in the garden .

Ans : 68 Plants

Q-2. The following table shows information about the modes of transport used by students to commute to school.

Mode of transport	Number of students
Bus	
Car	
Walking	
Bicycle	
Key :  Represents 3 children	

Answer the following questions based on the information given above.

Q1. . How many students commute by car?

Ans - No. of students who commute by car = $4 \times 3 = 12$.

Q-2. Which is the most commonly used mode of transport?

Ans - The bus is the most commonly used mode of transport.

Q -3. Which is the least preferred mode to reach school?

Ans : The least preferred mode to reach school is a bicycle.

